

VECTOR FIELDS - ANSWERS

Match each vector field below with the correct image on the following page.

1. $F(x, y) = -y\hat{i} + x\hat{j}$ e

2. $F(x, y) = -y\hat{i} - x\hat{j}$ f

3. $F(x, y) = y\hat{i} - x\hat{j}$ d

4. $F(x, y) = \hat{i} - x\hat{j}$ i

5. $F(x, y) = x\hat{i} + y\hat{j}$ i

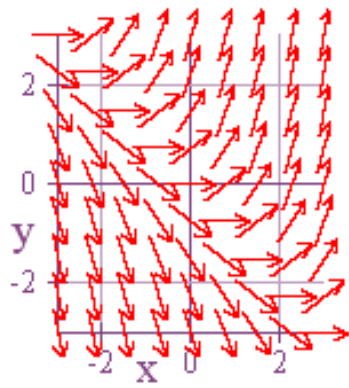
6. $F(x, y) = -x\hat{i} - y\hat{j}$ h

7. $F(x, y) = \hat{i} + (x + y)\hat{j}$ a

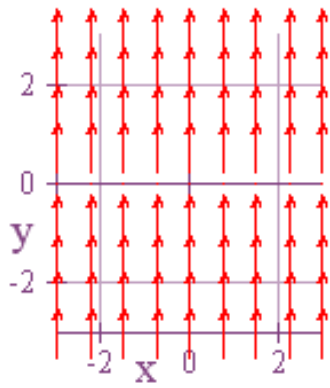
8. $F(x, y) = |x|\hat{i}$ c

9. $F(x, y) = |y|\hat{j}$ b

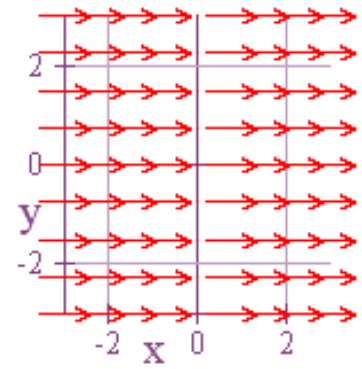
10. $F(x, y) = -y\hat{i} + (x + y)\hat{j}$ g



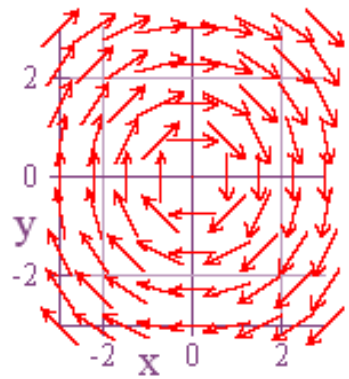
a.



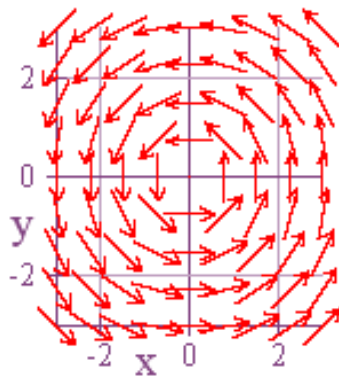
b.



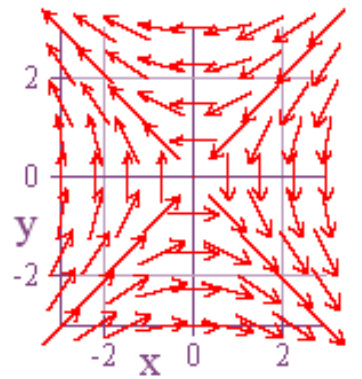
c.



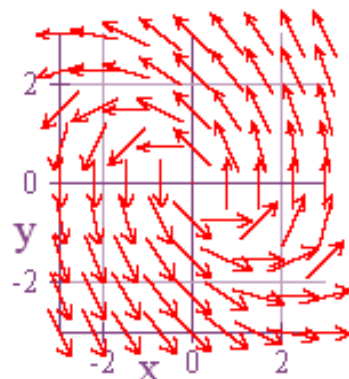
d.



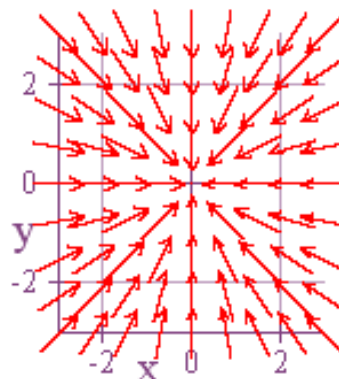
e.



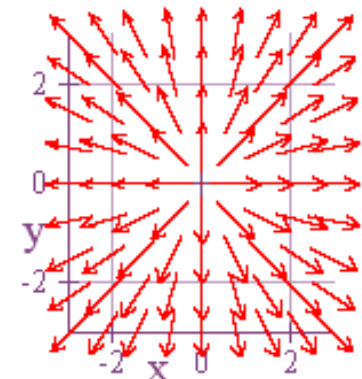
f.



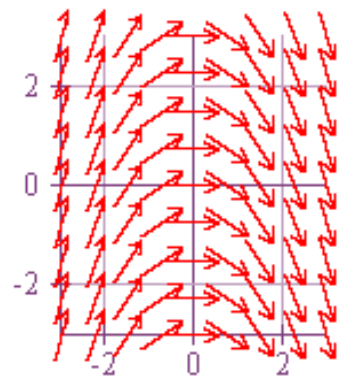
g.



h.



i.



j.