

Lesson 20

FRIEZE GROUPS – ANSWERS

Use the flow chart from the lesson to classify each frieze pattern below as either F1, F2, F3, F4, F5, F6, or F7.

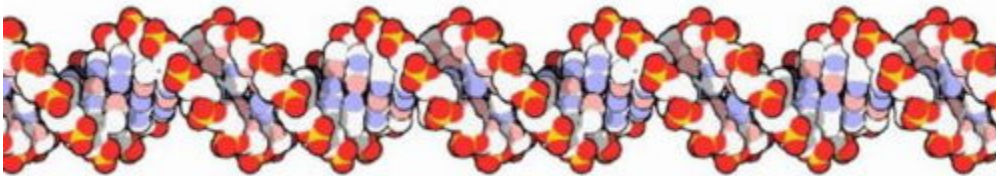
1. F6 – Jump



2. F3 – Sidle



3. F4 – Spinning Sidle



4. F2 – Step



5. F4 – Spinning Sidle



Lesson 20

6. F1 – Hop




7. F1 – Hop



8. F4 – Spinning Hop



9. F7 – Spinning Jump




10. Either through drawing by hand or by using a program such as Photoshop, create examples of each of the seven frieze groups.

F1 – Hop




Lesson 20

F2 – Step



F3 – Sidle



F4 – Spinning Hop



F5 – Spinning Sidle



Lesson 20

F6 – Jump



F7 – Spinning Jump

